





Got NUMERACY?

-  = *Vegetation*
-  = *Island Polygon*
-  = *Reef Shallow*
-  = *Lagoon*

Scale 1:100,000

w/c 21st May

Bonus question:
Where is this place?

14.500°S

Here is part of a map.
The scale for this map is
1:100 000.

If the distance between two places is
14 cm on the map, how many
centimetres would this be on the
ground?

Here is part of a map.
The scale for this map is
1:100 000.

If the distance between two places is
14 cm on the map, how many
kilometres would this be on the
ground?